



Department of Pure and Applied Chemistry

CH106 Chemistry: Principles & Practice 1

Answer each Multiple Choice Question on the EDPAC sheet provided. See overleaf for instructions.

Each of the 50 questions is worth 1 mark

Date: 7<sup>th</sup> December 2023

Time: 10am

Duration: 2 hours

Periodic Table of Elements

1 H 1																	2 He 4
3 Li 6.94	4 Be 9.01											5 B 10.8	6 C 12	7 N 14	8 O 16	9 F 19	10 Ne 20.2
11 Na 23	12 Mg 24.3											13 Al 27	14 Si 28.1	15 P 31	16 S 32.1	17 Cl 35.5	18 Ar 39.9
19 K 39.1	20 Ca 40.1	21 Sc 45	22 Ti 47.9	23 V 50.9	24 Cr 52	25 Mn 54.9	26 Fe 55.8	27 Co 58.9	28 Ni 58.7	29 Cu 63.5	30 Zn 65.4	31 Ga 69.7	32 Ge 72.6	33 As 74.9	34 Se 79	35 Br 79.9	36 Kr 83.8
37 Rb 85.5	38 Sr 87.6	39 Y 88.9	40 Zr 91.2	41 Nb 92.9	42 Mo 95.9	43 Tc (98)	44 Ru 101.1	45 Rh 102.9	46 Pd 106.4	47 Ag 107.9	48 Cd 112.4	49 In 114.8	50 Sn 118.7	51 Sb 122	52 Te 127.6	53 I 126.9	54 Xe 131.3
55 Cs 132.9	56 Ba 137.3	57 La* 138.9	72 Hf 178.5	73 Ta 180.9	74 W 183.9	75 Re 186.2	76 Os 190.2	77 Ir 192.2	78 Pt 195.1	79 Au 197	80 Hg 200.6	81 Tl 204.4	82 Pb 207	83 Bi 209	84 Po (209)	85 At (210)	86 Rn (222)
87 Fr (223)	88 Ra 226	89 Ac# 227															

58 Ce 140.1	59 Pr 140.9	60 Nd 144.2	61 Pm (145)	62 Sm 150.4	63 Eu 152	64 Gd 157.3	65 Tb 158.9	66 Dy 162.5	67 Ho 164.9	68 Er 167.3	69 Tm 168.9	70 Yb 173	71 Lu 175
90 Th 232	91 Pa 231	92 U 238	93 Np 237	94 Pu (244)	95 Am (243)	96 Cm (247)	97 Bk (247)	98 Cf (251)	99 Es (252)	100 Fm (257)	101 Md (258)	102 No (259)	103 Lr (260)

Dr. Alan Kennedy (ARK): Inorganic  
 Dr. Barry Moore (BM): Physical  
 Dr. Donna Ramsay (DR): Structure & Bonding  
 Dr. Patrick Thomson (PT): Organic

Physical chemistry equations and constants found on last page of paper.

Multiple Choice Examination Answer Sheet Guide

You have been issued with an “EDPAC” answer sheet, which must be filled out with your answers as follows:

- PRINT** your surname and initials as shown on the sample sheet below. Use black pen or pencil.
- MARK OFF YOUR SURNAME AND INITIALS.** If you have a hyphenated name, do not leave a space between names. If your name is too long, only fill in as many characters as fit on the sheet.
- MARK OFF YOUR REGISTRATION NUMBER IN THE CANDIDATE NUMBER BOX.**
- PRINT** the module code of CH106 in both **SUBJECT** boxes, and mark off the subject code.
- Cross out the appropriate letters to indicate the answer to the question. **USE A THICK HORIZONTAL LINE.** You may use **BLACK INK** or an **HB PENCIL.** Ensure that you mark off the letter completely and accurately, including the brackets and no more.
- Make as few changes to the EDPAC answer sheet as possible. It is best to write your answers on the examination paper until you are satisfied with them then transcribe them on to the special pink sheet.
- If you must alter an answer in ink, use white Tipp-Ex. This can be requested from an invigilator.
- WRITE AN ANSWER FOR EVERY QUESTION.** There is no penalty for guessing incorrectly.

CANDIDATE NAME														INIT.	
B	L	O	G	G	S									F	D
A	A	A	A	A	A	A	A	A	A	A	A	A	A	A	A
<del>B</del>	B	B	B	B	B	B	B	B	B	B	B	B	B	B	B
C	C	C	C	C	C	C	C	C	C	C	C	C	C	C	C
D	D	D	D	D	D	D	D	D	D	D	D	D	D	D	<del>D</del>
E	E	E	E	E	E	E	E	E	E	E	E	E	E	E	E
F	F	F	F	F	F	F	F	F	F	F	F	F	F	F	F
G	G	G	<del>G</del>	<del>G</del>	G	G	G	G	G	G	G	G	G	G	G
H	H	H	H	H	H	H	H	H	H	H	H	H	H	H	H
I	I	I	I	I	I	I	I	I	I	I	I	I	I	I	I
J	J	J	J	J	J	J	J	J	J	J	J	J	J	J	J
K	K	K	K	K	K	K	K	K	K	K	K	K	K	K	K
L	<del>L</del>	L	L	L	L	L	L	L	L	L	L	L	L	L	L
M	M	M	M	M	M	M	M	M	M	M	M	M	M	M	M
N	N	N	N	N	N	N	N	N	N	N	N	N	N	N	N
O	O	<del>O</del>	O	O	O	O	O	O	O	O	O	O	O	O	O
P	P	P	P	P	P	P	P	P	P	P	P	P	P	P	P
Q	Q	Q	Q	Q	Q	Q	Q	Q	Q	Q	Q	Q	Q	Q	Q
R	R	R	R	R	R	R	R	R	R	R	R	R	R	R	R
S	S	S	S	S	<del>S</del>	S	S	S	S	S	S	S	S	S	S
T	T	T	T	T	T	T	T	T	T	T	T	T	T	T	T
U	U	U	U	U	U	U	U	U	U	U	U	U	U	U	U
V	V	V	V	V	V	V	V	V	V	V	V	V	V	V	V
W	W	W	W	W	W	W	W	W	W	W	W	W	W	W	W
X	X	X	X	X	X	X	X	X	X	X	X	X	X	X	X
Y	Y	Y	Y	Y	Y	Y	Y	Y	Y	Y	Y	Y	Y	Y	Y
Z	Z	Z	Z	Z	Z	Z	Z	Z	Z	Z	Z	Z	Z	Z	Z

SUBJECT
CH106

CANDIDATE NUMBER								
0	0	0	0	0	0	0	0	0
1	1	1	1	1	1	1	1	1
2	2	2	2	2	2	2	2	2
3	3	3	3	3	3	3	3	3
4	4	4	4	4	4	4	4	4
5	5	5	5	5	5	5	5	5
6	6	6	6	6	6	6	6	6
7	7	7	7	7	7	7	7	7
8	8	8	8	8	8	8	8	8
9	9	9	9	9	9	9	9	9

SUBJECT		
1	0	6
0	<del>0</del>	0
1	1	1
2	2	2
3	3	3
4	4	4
5	5	5
6	6	<del>6</del>
7	7	7
8	8	8
9	9	9

Use HB Pencil to complete this form

1	<del>A</del>	B	C	D	E
2	A	B	<del>C</del>	D	E
3	A	B	<del>C</del>	D	E
4	A	<del>B</del>	C	D	E
5	A	B	C	<del>D</del>	E
6	A	B	C	D	<del>E</del>
7	A	<del>B</del>	C	D	E
8	A	B	C	D	<del>E</del>
9	<del>A</del>	B	C	D	E
10	A	B	C	<del>D</del>	E

31	A	<del>B</del>	C	D	E
32	A	B	<del>C</del>	D	E
33	<del>A</del>	B	C	D	E
34	<del>A</del>	B	C	D	E
35	A	B	<del>C</del>	D	E
36	A	B	<del>C</del>	D	E
37	A	<del>B</del>	C	D	E
38	A	B	C	<del>D</del>	E
39	A	B	C	<del>D</del>	E
40	A	B	C	D	<del>E</del>

61	A	B	C	D	E
62	A	B	C	D	E
63	A	B	C	D	E
64	A	B	C	D	E
65	A	B	C	D	E
66	A	B	C	D	E
67	A	B	C	D	E
68	A	B	C	D	E
69	A	B	C	D	E
70	A	B	C	D	E

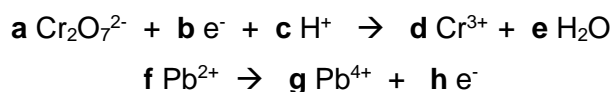
91	A	B	C	D	E
92	A	B	C	D	E
93	A	B	C	D	E
94	A	B	C	D	E
95	A	B	C	D	E
96	A	B	C	D	E
97	A	B	C	D	E
98	A	B	C	D	E
99	A	B	C	D	E
100	A	B	C	D	E

DG (6) – Analytical (Written by PT)

1. If 10.0 mL of a 0.333 mol dm<sup>-3</sup> solution of sulfuric acid is titrated with a 0.314 mol dm<sup>-3</sup> solution of sodium hydroxide, what volume of sodium hydroxide is required to reach the equivalence point?
  - (a) 5.3 mL
  - (b) 10.6 mL
  - (c) 21.2 mL
  - (d) 22.1 mL
  - (e) 42.4 mL
  
2. Silver nitrate is used as a primary standard for which of the following?
  - a) potassium permanganate
  - b) hydrochloric acid
  - c) silver nitrate
  - d) sodium chloride
  - e) sodium thiosulfate
  
3. What indicator could you use for a titration between hydrochloric acid and sodium hydroxide?
  - (a) phenolphthalein
  - (b) methyl orange
  - (c) potassium permanganate
  - (d) bromothymol blue
  - (e) potassium chromate

PLEASE TURN OVER

4. Balance the following redox half-equations and combine them to give the chemical equation. Which of the following values is the total of the stoichiometric coefficients (**a** to **h**) after cancelling common species? (Remember to count the coefficient if it is one.)



- (a) 26  
 (b) 28  
 (c) 29  
 (d) 30  
 (e) 42
5. Which of the following is the correct half equation for the reaction of permanganate in basic solution?
- (a)  $\text{MnO}_4^- + 8 \text{H}^+ + 5 \text{e}^- \rightarrow \text{Mn}^{2+} + 4 \text{H}_2\text{O}$   
 (b)  $\text{MnO}_4^- + \text{e}^- \rightarrow \text{MnO}_4^{2-}$   
 (c)  $\text{MnO}_4^- + 8 \text{H}^+ + \text{e}^- \rightarrow \text{Mn}^{2+} + 4 \text{H}_2\text{O}$   
 (d)  $\text{MnO}_4^- + 4 \text{H}^+ + 3 \text{e}^- \rightarrow \text{MnO}_2 + 2 \text{H}_2\text{O}$   
 (e)  $\text{MnO}_4^- + 8 \text{H}^+ + 4 \text{e}^- \rightarrow \text{Mn}^{3+} + 4 \text{H}_2\text{O}$
6. A student collects the following set of titration data, where the true value of concentration is  $0.100 \text{ mol dm}^{-3}$ . Which statement best describes whether this data is precise and/or accurate?

*0.92 mol dm<sup>-3</sup>, 0.91 mol dm<sup>-3</sup>, 0.93 mol dm<sup>-3</sup>, 0.93 mol dm<sup>-3</sup>*

- (a) The data is not precise, but it is accurate  
 (b) The data is precise, but not accurate  
 (c) The data is both precise and accurate  
 (d) The data is neither precise nor accurate  
 (e) It is impossible to tell from the given data

**PLEASE TURN OVER**

ARK (11) – Inorganic

7. Which of the following describes Ionisation Energy?
- (a) The change in energy on removing an electron from a positive ion in the gaseous state to form a neutral atom.
  - (b) The change in energy on removing an electron from a neutral atom in the gaseous state to form a positive ion.
  - (c) The change in energy on adding an electron to a positive ion in the gaseous state to form a neutral atom.
  - (d) The change in energy on adding an electron to a negative ion in the gaseous state to form a cation.
  - (e) The change in energy on adding an electron to a neutral atom in the gaseous state to form a negative ion.
8. From trends in the periodic table, which of the following statements is true?
- (a) Mg has a larger atomic radius than Na, and Mg is more electronegative than Na.
  - (b) Mg has a larger atomic radius than Ca, and Mg is less electronegative than Ca.
  - (c) Mg has a larger atomic radius than Na, and Mg is less electronegative than Si.
  - (d) K has a larger atomic radius than Na, and K is more electronegative than Na.
  - (e) Mg has a smaller atomic radius than Na, and K is less electronegative than Na.
9. Which one of the following statements is **INCORRECT**?
- (a) As you move down group 1 from Li to Cs, the ionisation energy decreases.
  - (b) Hydrogen and helium are the most abundant elements in the universe.
  - (c) KF is an ionic solid.
  - (d) Atomic radii decreases across the periodic table from left to right (e.g. from Na to Cl).
  - (e) Effective nuclear charge decreases across the periodic table from left to right (e.g. from Na to Cl).

**PLEASE TURN OVER**

10. What are the oxidation states of Ca, Se and O in  $\text{CaSeO}_4$  ?
- (a) +1, -1, -4
  - (b) +2, +6, -2
  - (c) +2, +4, -8
  - (d) +2, +6, +2
  - (e) +2, +2, -2
11. Which of the following contains an element in the +3 oxidation state?
- (a)  $\text{PCl}_3\text{O}$
  - (b)  $\text{Li}_3\text{N}$
  - (c)  $\text{Ga}_2\text{O}_3$
  - (d)  $\text{H}_2\text{SO}_4$
  - (e)  $\text{HNO}_3$
12. Which of the following is **NOT** normally an ion with a stable oxidation state ?
- (a) Al +3
  - (b) S +2
  - (c) K +1
  - (d) Br -1
  - (e) Se -2
13. What shape does Valence Shell Electron Pair Repulsion (VSEPR) theory predict for the anion  $\text{ClO}_4^-$  ?
- (a) tetrahedral
  - (b) square planar
  - (c) disphenoidal (see-saw shaped)
  - (d) square pyramid
  - (e) bent

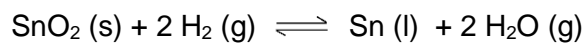
PLEASE TURN OVER

14. Which species does VSEPR theory predict will have 2 lone pairs of electrons on the central atom?
- (a)  $\text{NH}_4^+$
  - (b)  $\text{OH}_3^+$
  - (c)  $\text{NF}_3$
  - (d)  $\text{PH}_3$
  - (e)  $\text{XeF}_4$
15. Which species is **NOT** a correct prediction according to VSEPR theory ?
- (a)  $\text{CH}_4$  is tetrahedral.
  - (b)  $\text{SiH}_4$  is tetrahedral.
  - (c)  $\text{NH}_3$  is trigonal pyramidal.
  - (d)  $\text{BH}_3$  is trigonal pyramidal.
  - (e)  $\text{SbH}_3$  is trigonal pyramidal.
16. Which of the following statements is **TRUE** ?
- (a) In  $\text{NaMnO}_4$ , the oxidation state of Mn is +7.
  - (b)  $\text{Na}_2\text{O}$  is a covalent compound.
  - (c) In  $\text{H}_3\text{PO}_4$ , the oxidation state of P is +3.
  - (d)  $\text{PF}_5$  has a square pyramidal shape.
  - (e) The elements B, Al, Si and Tl are all semi-metals.
17. Which of the following statements is **TRUE** ?
- (a) A Lewis base is an electron acceptor.
  - (b) A Bronsted base is an electron acceptor.
  - (c) Alcohols (ROH) are stronger hydrogen bond donors than thiols (RSH).
  - (d) In the periodic table, the diagonal relationship between Be and Si means that they have similar characteristics.
  - (e) Butyl lithium is more reactive than butyl potassium.

**PLEASE TURN OVER**

**BM (11) – Physical**

18. The following reaction has reached chemical equilibrium at 900 K.



Which of the following is the correct expression to calculate K for this reaction?

(a)  $\frac{[\text{Sn}] \cdot [\text{H}_2\text{O}]^2}{[\text{SnO}_2] \cdot [\text{H}_2]^2}$

(b)  $\frac{[\text{Sn}] \cdot [\text{H}_2\text{O}]^2}{[\text{H}_2]^2}$

(c)  $\frac{[\text{H}_2\text{O}]^2}{[\text{H}_2]^2}$

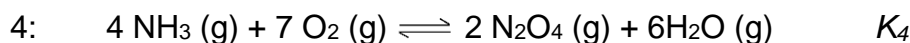

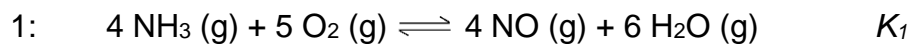
(d)  $\frac{[\text{H}_2\text{O}]}{[\text{H}_2]}$

(e)  $\frac{1}{[\text{H}_2]^2}$

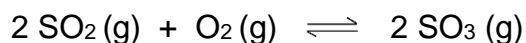
**PLEASE TURN OVER**



19. In the following reaction sequence, the nitric oxide produced in reaction 1 reacts further to produce nitrogen dioxide in reaction 2 which may associate to  $\text{N}_2\text{O}_4$  by reaction 3. What is the equilibrium constant for the overall reaction 4?



- (a)  $K_4 = K_1 \times K_2 / K_3$   
 (b)  $K_4 = K_1 \times K_2^2 / K_3^2$   
 (c)  $K_4 = K_1 \times K_2 \times K_3$   
 (d)  $K_4 = K_1 \times K_2^2 / K_3$   
 (e)  $K_4 = K_1 \times K_2^2 \times K_3^2$
20. The reaction



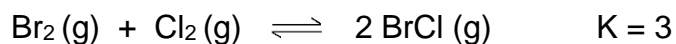
has an equilibrium constant of 30 at 900 K. An equilibrium mixture is sampled and found to contain  $[\text{SO}_3] = 0.078 \text{ mol dm}^{-3}$  and  $[\text{O}_2] = 0.045 \text{ mol dm}^{-3}$ .

What is  $[\text{SO}_2]$ ?

- (a)  $0.0045 \text{ mol dm}^{-3}$   
 (b)  $0.058 \text{ mol dm}^{-3}$   
 (c)  $0.090 \text{ mol dm}^{-3}$   
 (d)  $0.078 \text{ mol dm}^{-3}$   
 (e)  $0.067 \text{ mol dm}^{-3}$

**PLEASE TURN OVER**

21. Gaseous chlorine and bromine (0.300 mol each) are mixed in a 3.00 dm<sup>3</sup> container and the following reaction allowed to come to equilibrium:



The following ICE table was prepared:

	Cl <sub>2</sub>	Br <sub>2</sub>	BrCl
Initial	0.1	0.1	0
Change	-x	-x	+2x
Equilibrium	0.1 - x	0.1 - x	2x

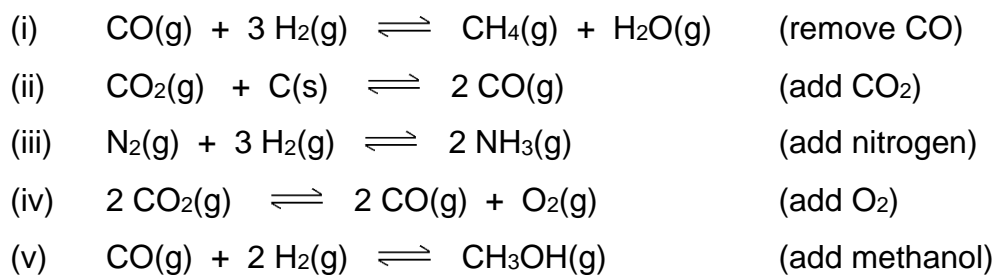
These values were substituted into an expression for the equilibrium constant.

What will be the equilibrium concentration of BrCl?

- (a) 0.0928 mol dm<sup>-3</sup>
- (b) 0.0234 mol dm<sup>-3</sup>
- (c) 0.0634 mol dm<sup>-3</sup>
- (d) 0.0195 mol dm<sup>-3</sup>
- (e) 0.173 mol dm<sup>-3</sup>

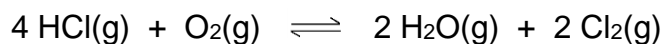
**PLEASE TURN OVER**

22. Consider the following reactions at equilibrium and determine which of the indicated changes will cause the reaction to proceed to the left.



- (a) i, ii and v  
(b) iii and iv  
(c) ii, iii and v  
(d) i, iv and v  
(e) ii and v

23. For the exothermic reaction:



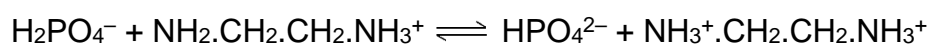
which of the following conditions will shift the equilibrium to the left?

- (a) increasing the temperature  
(b) adding more oxygen  
(c) adding a catalyst  
(d) increasing the pressure  
(e) removing chlorine

**PLEASE TURN OVER**

24. The  $pK_a$  values of five substances are given below. Which of these will give the highest  $pH$  value when dissolved in water at a concentration of 0.01 M?
- a) benzoic acid,  $pK_a = 4.19$
  - b) 2,4-dinitrophenol,  $pK_a = 3.96$
  - c) hypobromous acid,  $pK_a = 8.69$
  - d) hypochlorous acid,  $pK_a = 7.53$
  - e) hydrocyanic acid,  $pK_a = 9.31$

25. In the reaction



which two species are acting as bases?

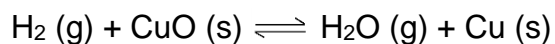
- (a)  $HPO_4^{2-}$  and  $H_2PO_4^-$
  - (b)  $HPO_4^{2-}$  and  $NH_3^+.CH_2.CH_2.NH_3^+$
  - (c)  $HPO_4^{2-}$  and  $NH_2.CH_2.CH_2.NH_3^+$
  - (d)  $H_2PO_4^-$  and  $NH_3^+.CH_2.CH_2.NH_3^+$
  - (e)  $NH_3^+.CH_2.CH_2.NH_3^+$  and  $NH_2.CH_2.CH_2.NH_3^+$
26. Here are some chemical species that might be present in a buffer solution. Which of them are essential if the buffer is to control  $pH$ ?
- 1. A strong acid able to produce  $H^+$
  - 2. A weak acid or conjugate acid able to produce  $H^+$
  - 3. A strong base able to produce  $OH^-$
  - 4. A weak base or conjugate base able to produce  $OH^-$
- a) 1 and 2
  - b) 1 and 3
  - c) 2 and 4
  - d) 3 and 4
  - e) All of them

**PLEASE TURN OVER**

27. For which of the following is the enthalpy of formation NOT zero?

- a) C (s)
- b) N<sub>2</sub> (g)
- c) H<sub>2</sub> (g)
- d) Na (s)
- e) ZnO (s)

28. The reaction



has a  $\Delta H^\circ$  value of  $-86 \text{ kJ mol}^{-1}$ . The standard enthalpy of formation of CuO (s) is known to be  $-155.8 \text{ kJ mol}^{-1}$ . What is the enthalpy of formation of H<sub>2</sub>O (g)?

- a)  $-327.8 \text{ kJ mol}^{-1}$
- b)  $-241.8 \text{ kJ mol}^{-1}$
- c)  $+86 \text{ kJ mol}^{-1}$
- d)  $+155.8 \text{ kJ mol}^{-1}$
- e)  $+327.8 \text{ kJ mol}^{-1}$

**PLEASE TURN OVER**

DR (11) – Structure & Bonding

29. Which one of the following statements about Rutherford's model of the atom is **CORRECT**?
- (a) The electrons emit radiation as they orbit the nucleus.
  - (b) The electron orbits are described by quantum numbers.
  - (c) The protons are in the nucleus whilst the neutrons and electrons occupy the remaining space.
  - (d) The mass is highly concentrated at the centre of the atom.
  - (e) The particles are evenly distributed in a plum pudding model.
30. Which of the following states Hund's Rule?
- (a) A subatomic particle has a wavelength that is related to its mass.
  - (b) Electrons are added to an atom starting with the lowest orbital first.
  - (c) An electron can have either particle character or wave character.
  - (d) Both the position of an electron and its momentum cannot simultaneously be known very accurately.
  - (e) Electrons will occupy different degenerate orbitals and have parallel spins if allowed by the exclusion principle.
31. Which of the following statements about the quantum numbers in a hydrogen atom is **INCORRECT**?
- (a)  $n$  has integer values from 1 upwards
  - (b)  $l$  has values from zero up to  $n$
  - (c)  $m$  has values of  $+l$  to  $-l$  including zero
  - (d)  $m$  has  $2l + 1$  possible values
  - (e)  $s$  has the values of  $+\frac{1}{2}$  and  $-\frac{1}{2}$

**PLEASE TURN OVER**

32. Which of the following statements about angular functions and quantum numbers is **CORRECT**?
- (a) If  $n = 2$  and  $m_l = 0$ ,  $l$  must be 1
  - (b) The combination  $n = 4$ ,  $l = 4$ ,  $m_l = -2$ ,  $m_s = -1/2$  is not permitted.
  - (c) If  $n = 3$ , there are five  $d$  orbitals: two of them lie between the axes ( $x$ ,  $y$ ,  $z$ ), and the other three are directed along the axes.
  - (d) The quantum numbers  $n$  and  $m_l$  define the shape of atomic orbitals.
  - (e) The  $s$  angular function is a dumbbell shape centred on the nucleus.
33. Select a valid combination of sets of quantum numbers for the two  $3p$  electrons of Si.
- (a)  $n = 3, l = 0, m_l = 0, m_s = +1/2$   
 $n = 3, l = 0, m_l = 0, m_s = -1/2$
  - (b)  $n = 2, l = 1, m_l = +1, m_s = -1/2$   
 $n = 2, l = 1, m_l = 0, m_s = -1/2$
  - (c)  $n = 3, l = 1, m_l = -1, m_s = +1/2$   
 $n = 3, l = 1, m_l = +1, m_s = +1/2$
  - (d)  $n = 3, l = 1, m_l = +1, m_s = +1/2$   
 $n = 3, l = 1, m_l = 0, m_s = -1/2$
  - (e)  $n = 3, l = 1, m_l = 0, m_s = -1/2$   
 $n = 3, l = 0, m_l = +1, m_s = -1/2$
34. Which of the following ground state electronic structures is **CORRECT**?
- (a) B ( $Z = 5$ )  $1s^2 2s^2 3p^1$
  - (b) P ( $Z = 15$ )  $1s^2 2s^2 2p^6 3s^2 3p^2 3d^1$
  - (c) Ca ( $Z = 20$ )  $1s^2 2s^2 2p^6 3s^2 3p^6 3d^2$
  - (d) Cu ( $Z = 29$ )  $1s^2 2s^2 2p^6 3s^2 3p^6 4s^1 3d^{10}$
  - (e) Ga ( $Z = 31$ )  $1s^2 2s^2 2p^6 3s^2 3p^6 4s^2 3d^9 4p^2$

PLEASE TURN OVER

35. Which one of the following statements regarding the periodic table is **INCORRECT**?
- (a) The ionisation energy of an element generally decreases as we progress from left to right along the rows of the periodic table.
  - (b) The electronegativity of an element generally increases as we progress from left to right along the rows of the periodic table.
  - (c) The main group elements are those present in the columns where the outer s and p orbitals are being filled.
  - (d) The elements are arranged in order of increasing atomic number.
  - (e) The elements in each column have the same outer electronic configuration.
36. The valence bond description states that  $sp^2$  hybridisation is found in which one of the following?
- (a)  $NH_3$
  - (b)  $SF_6$
  - (c)  $H_2S$
  - (d)  $BeH_2$
  - (e)  $C_6H_6$
37. The valence bond description of the hybridisation of the atomic orbitals of C present in the ground state of  $C_2H_2$  is which one of the following?
- (a) one  $sp$  hybrid orbital and three p orbitals
  - (b) two  $sp$  hybrid orbitals and two p orbitals
  - (c) two  $sp^2$  hybrid orbitals and two p orbitals
  - (d) three  $sp^2$  hybrid orbitals and one p orbital
  - (e) four  $sp^3$  hybrid orbitals

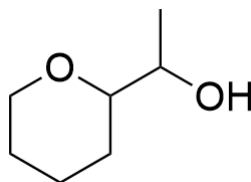
**PLEASE TURN OVER**



38. Which of the following statements concerning the molecular orbital approach to bonding is **INCORRECT**?
- (a) A bond is always formed by a pair of electrons.
  - (b) The atomic orbitals interact to form bonding and antibonding orbitals.
  - (c) Atomic orbitals that are in-phase form a bonding molecular orbital.
  - (d) The bonding and antibonding orbitals are delocalised over the whole molecule.
  - (e) Completely new molecular orbitals of different shapes are formed from the atomic orbitals.
39. The molecular orbital energy diagram of  $N_2$  shows that  $N_2$  has which one of the following?
- (a) 2 bonding  $2p\pi$  electrons
  - (b) 2 antibonding  $2p\sigma^*$  electrons
  - (c) 3 unpaired electrons in  $2p\pi$  and  $2p\sigma$  orbitals
  - (d) 3 unpaired electrons in  $2p\pi^*$  and  $2p\sigma^*$  orbitals
  - (e) no unpaired electrons in  $2p\pi^*$  and  $2p\sigma^*$  orbitals

**PT (11) – Organic Chemistry**

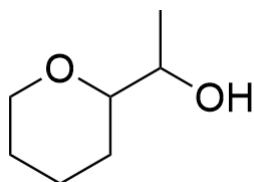
40. How many hydrogen atoms are in the formula of the molecule shown below?



- (a) 11
- (b) 12
- (c) 13
- (d) 14
- (e) 15

**PLEASE TURN OVER**

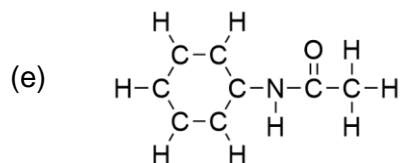
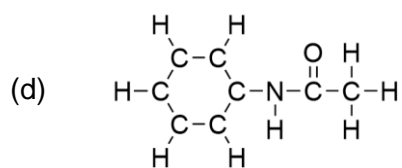
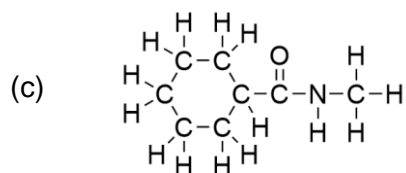
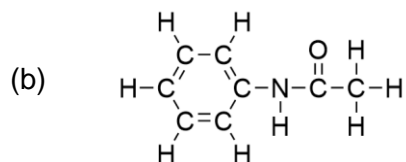
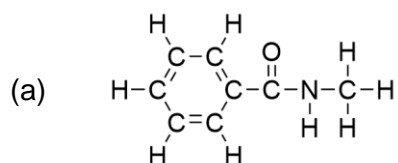
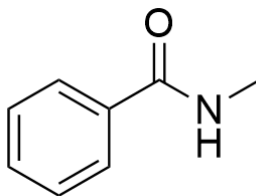
41. How many stereogenic (chiral) centres are in the same molecule?



- (a) 0
- (b) 1
- (c) 2
- (d) 3
- (e) 4

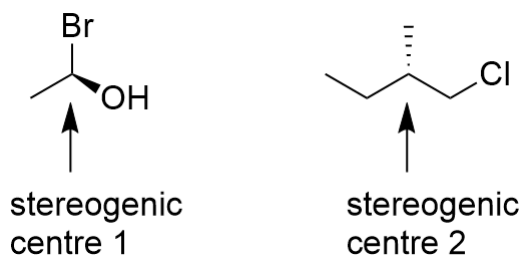
PLEASE TURN OVER

42. Which one of the following expanded (line) formula corresponds to the structure shown below?

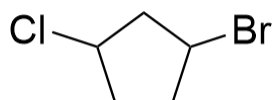


PLEASE TURN OVER

43. Assign the absolute configuration of the two stereogenic centres indicated below.  
This question only has four options.



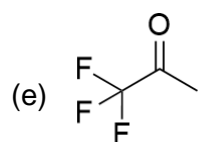
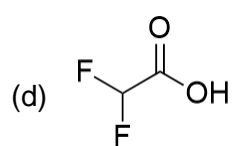
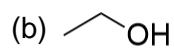
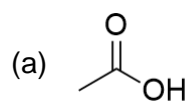
- (a) Stereogenic centre 1 = (*R*), stereogenic centre 2 = (*R*)  
 (b) Stereogenic centre 1 = (*R*), stereogenic centre 2 = (*S*)  
 (c) Stereogenic centre 1 = (*S*), stereogenic centre 2 = (*R*)  
 (d) Stereogenic centre 1 = (*S*), stereogenic centre 2 = (*S*)
44. Which of the options best corresponds to the name of the compound shown below?



- (a) 1-bromo-3-chlorocyclopentane  
 (b) 1-chloro-3-bromocyclopentane  
 (c) 3-chloro-1-bromocyclopentane  
 (d) 3-bromo-1-chlorocyclopentane  
 (e) 2-bromo-5-chlorocyclopentane

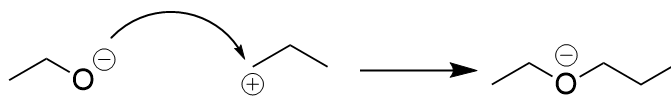
**PLEASE TURN OVER**

45. Which of the following molecules is the strongest acid?

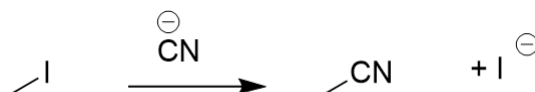


PLEASE TURN OVER

46. Which statement best describes the mechanism shown below?



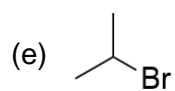
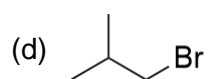
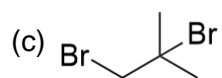
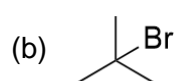
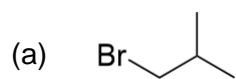
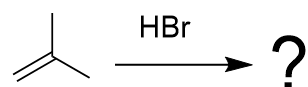
- (a) The mechanism is drawn correctly.
- (b) The mechanism is drawn incorrectly, because the atom at the **source** of the curly arrow has **lost too many** electrons.
- (c) The mechanism is drawn incorrectly, because the atom at the **source** of the curly arrow has **not lost enough** electrons.
- (d) The mechanism is drawn incorrectly, because the atom at the **destination** of the curly arrow has **gained too many** electrons.
- (e) The mechanism is drawn incorrectly, because the atom at the **destination** of the curly arrow has **gained too few** electrons.
47. Which of the following statements best describes the most likely mechanism of the following reaction scheme? This question only has four options.



- a) The reaction definitely only proceeds by an  $S_N1$  mechanism
- b) The reaction definitely only proceeds by an  $S_N2$  mechanism
- c) The reaction could proceed either by an  $S_N1$  or an  $S_N2$  mechanism
- d) The reaction could not proceed by either  $S_N1$  or an  $S_N2$  mechanism

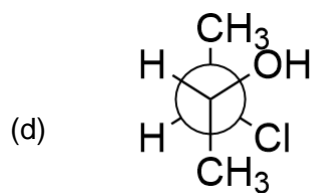
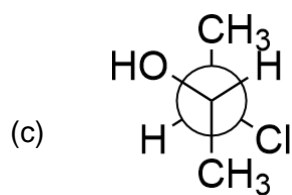
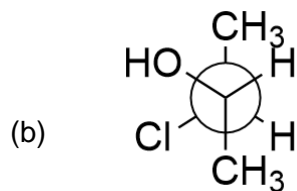
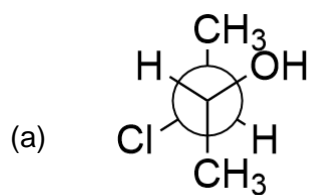
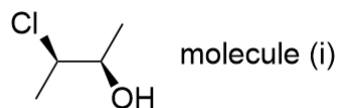
**PLEASE TURN OVER**

48. Which one of the following molecules would be the expected final product of the reaction scheme shown?



PLEASE TURN OVER

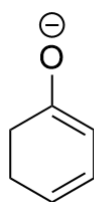
49. Which of the below options is the same stereoisomer as molecule (i), when viewed from a different angle and with 0 or more bonds rotated? This question only has four options.



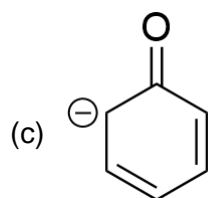
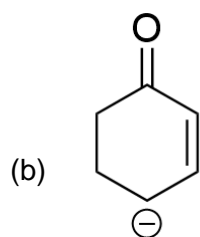
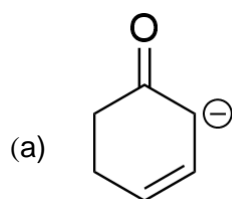
PLEASE TURN OVER



50. Molecule (ii) has several valid resonance forms. Which one of the molecules shown below, if any, is **NOT** a valid resonance form of molecule (ii)? This question only has four options.



molecule (ii)



- (d) All three of the other options shown are valid resonance forms.

PLEASE TURN OVER

Appendix: Physical Chemistry Formulae

$$\text{Kinetic Energy (KE)} = \frac{1}{2} m v^2$$

$$\text{Potential Energy (PE)} = m g h$$

$$P V = n R T$$

$$P_2 - P_1 = \rho g h$$

$$y_A = \frac{P_A}{P_{total}} = \frac{x_A P_A^o}{x_B (P_B^o - P_A^o) + P_A^o}$$

$$\sqrt{u^{-2}} = \sqrt{\frac{3RT}{MW}}$$

$$(P + n^2 a/V^2)(V - nb) = nRT$$

$$V_{STP} = \alpha_T P$$

$$P_A = P_A^o x_A$$

$$P_A = K x_A$$

$$\Delta T = K_{1000} \times 1000/m_A \times m_B/MW_B$$

$$w = -P dV$$

$$\Pi = (n/V) RT = A_1 c + A_2 c^2 + A_3 c^3 + \dots$$

$$\Delta U = w + q$$

$$\Delta H = \Delta U + \Delta(PV)$$

$$\Delta S = q/T$$

$$\Delta G = \Delta H - T\Delta S$$

$$dG/d\xi = 0$$

$$\text{Rate} = 1/A (d[X]/dt)$$

$$\ln\{a/(a-x)\} = kt$$

$$k = A e^{-(E_a/RT)}$$

End of Appendix